

,Assignment: 9. Date: 3/11/20. Subject: Mathematics  
Class: 1. Teacher: Kalpana Bawa

Topic: **Time**

Q1: write time shown by each clock :


**What time is it?**



Illustration of Santa Claus standing next to the title.





 <input type="text"/> o'clock	 <input type="text"/> o'clock	 <input type="text"/> o'clock
 <input type="text"/> o'clock	 <input type="text"/> o'clock	 <input type="text"/> o'clock

Q2 Draw hands on each clock to show the time:



Q3: Match the following:

**Match the Clock**  
Draw a line to connect the matching times.

	1:00
	7:00
	4:00
	6:00